




Stelle die Uhr! **3 Uhren zeigen die gleiche Zeit, welche sind es? Kreise sie ein!**




Es ist: 5 Minuten nach 6:00 Uhr




9:30 Uhr




viertel vor 8:00




Es ist: dreiviertel drei




elf Uhr dreiundvierzig




zwanzig vor neun




Es ist: halb zehn




13 Minuten vor 23:00Uhr




viertel nach vier



Es ist: zweiundzwanzig Uhr fünfzig



10 vor 11



30 Minuten vor 10